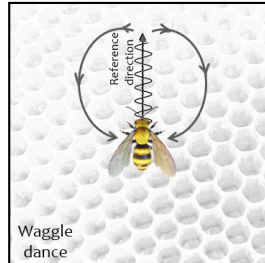


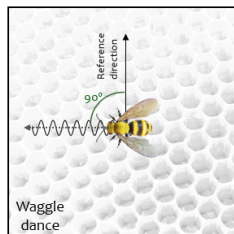
Worksheet 3 | Waggle dance

1. Observe the video [Waggle dancing honey bee! \(Credits: Flow Hive!\)](#) and the bee waggle dance scheme inside the hive, that indicates the location of a food source.



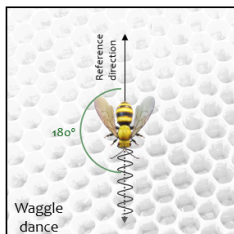
2. In nature, the reference direction is from the hive to the sun. Made the correspondence between the waggle dance inside the hive and the correct flight path to the food source outside the hive.

Inside the hive



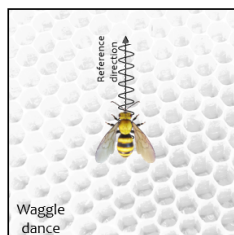
(A)

(i)



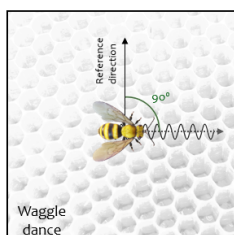
(B)

(ii)



(C)

(iii)



(D)

(iv)

Outside the hive

